



Year 7 HOME LEARNING

Week 8 Lessons 1& 2

Subject: Maths

Learning Objective: Add and Subtract 1s

Lesson 1:

Time to complete: 50 minutes

Please watch the video <https://vimeo.com/463031310> and complete the questions below.

- I** a) Jack has 6 cookies.



Annie gives him one more cookie.

How many cookies does he have now?

- b) Amir has 4 cookies.



He eats one of his cookies.

How many cookies does he have now?

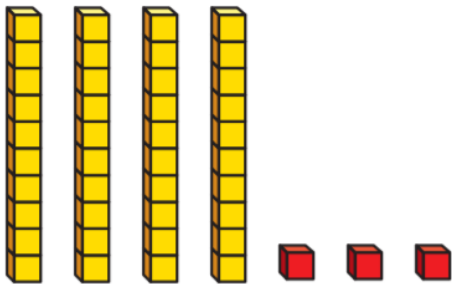
2 Complete the number tracks.

a.) 21..... 23

b.) 47 45

c.) 5 10

3 a) Filip has made a number using base 10



What number has Filip made?

b) Rosie also makes a number using base 10

Rosie's number is one more than Filip's number.

What is Rosie's number?

c) Ron's number is 2 more than Filip's number.

What is Ron's number?

d) Dora's number is 1 less than Filip's number.

What is Dora's number?

4 Complete the calculations.

a) $14 + 1 =$

b) $22 + 1 =$

c) $54 + 1 =$

d.) _____ $= 1 + 61$

e) $19 - 1 =$

f) $33 +$ $= 34$

g) $18 = 19 -$

h) $= 89 - 1$

5 Complete the calculations.

a) $14 + 2 =$

b) $22 + 3 =$

c) $54 + 4 =$

d) $= 5 + 61$

e) $19 - 2 = \square$

f) $33 + \square = 35$

g) $12 = 19 - \square$

h) $\square = 89 - 3$

6 Are the number sentences true or false?

a) $17 + 1 = 1 + 17$

b) $17 - 1 = 1 - 17$

Lesson 2:

**Mrs Shaw will be running an online LIVE lesson on:
Thursday 4th March at 10:15-10:45am**

[Click here to log into Teams](#)

Time to complete: 1 hour (30 minute live lesson, 30 minutes independent activity linked to live lesson.)

Let's look back at some of our learning from today, and some of our learning throughout the term.

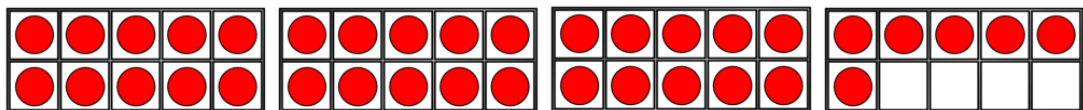
Independent Activity

1) Use $<$, $>$ or $=$ to compare. $15 + 4 \bigcirc 15 + 2$


2) Write the numbers in order starting with the smallest.

31, 23, 19, 34, 30

3) What number is represented?

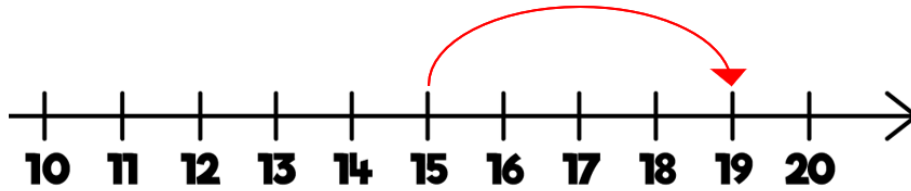


4) How many eggs are there?



Add together 37 and 6

What is 4 more than 15?



What is 9 more than 43?