



Year 7 HOME LEARNING

Subject: Maths

Time: 50 minutes approx.

Learning Objective: I can count in multiples

*The **answers to the questions are included at the bottom.** We would like the students to self-mark their work. This is a very valuable learning tool as it gives pupils immediate feedback and encourages independence and ownership over their learning. Please send your work in when you have marked it, showing any corrections that you have made.*

Task 1: (Miss Mendez)

I can count in multiples of 2s, 5s and 10s

Watch the following videos to practise counting in 2s, 5s and 10s.

'Count back from 20 with the count back cat'

https://www.youtube.com/watch?v=F6a2W8UQP5w&feature=emb_logo



'Count by 5s, exercise and count by 5'

https://www.youtube.com/watch?v=amxVL9KUmq8&feature=emb_logo



'Count 10 to 100, count by 10 song'

https://www.youtube.com/watch?v=-gmEe0-ex8&feature=emb_title

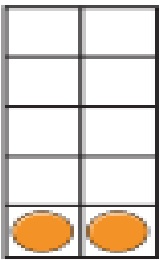

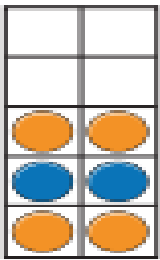
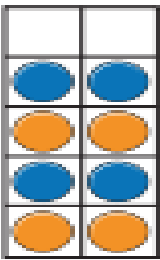
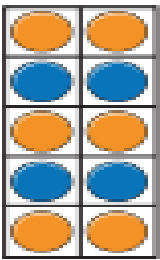


Task 2:

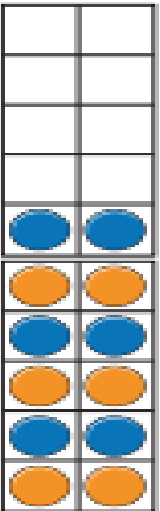


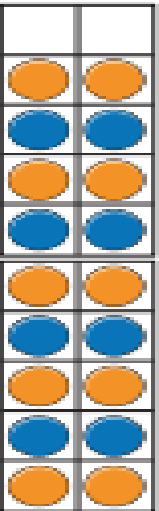

Try to answer the questions below. Take your time to consider whether you are being asked to count in 2s, 5s or 10s.

1 What are the numbers?

a)

				
<input type="text"/>	<input type="text"/>	<input type="text"/>	<input type="text"/>	<input type="text"/>

b)


				
<input type="text"/>	<input type="text"/>	<input type="text"/>	<input type="text"/>	<input type="text"/>

2 How many flowers are there?



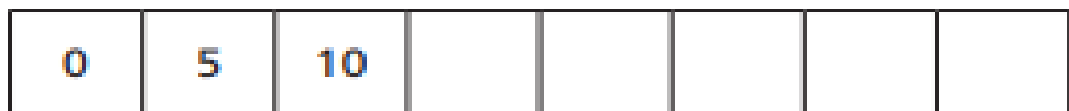
There are flowers.

3 Colour 35 petals.



4 Fill in the missing numbers.

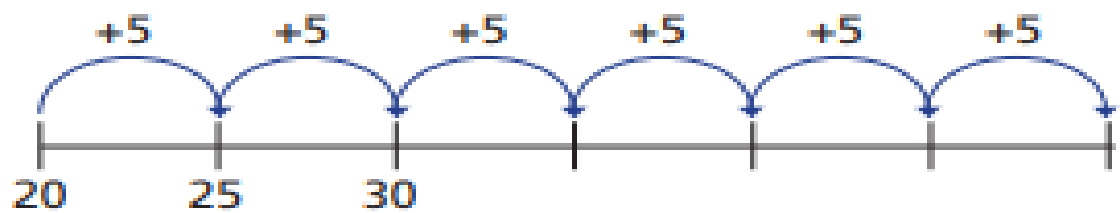
a)



b)



c)



5 Tom has these balloons.



He needs 60 balloons for a party.

Does Tom have enough balloons? _____

How do you know?

Save your work:

If you are using a computer, open a blank document to do your work (you can use Word or Publisher). Don't forget to SAVE it with your name, the lesson you are doing and the date.

For example: T.Smith Maths 8 April

If you would like us to see or mark your work please email it or send a photo of your completed work to:

smendez.305@glebe.bromley.sch.uk

Thank you

Answers

Task 2:



1 What are the numbers?

a)

2	4	6	8	10

b)

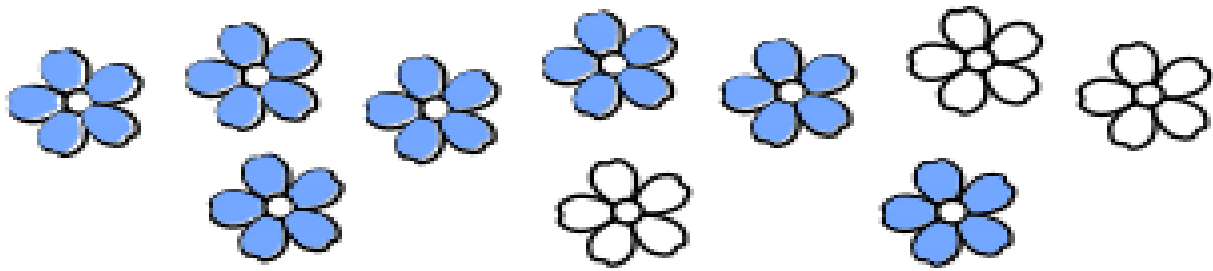
12	14	16	18	20

2 How many flowers are there?



There are flowers.

3 Colour 35 petals.



4 Fill in the missing numbers.

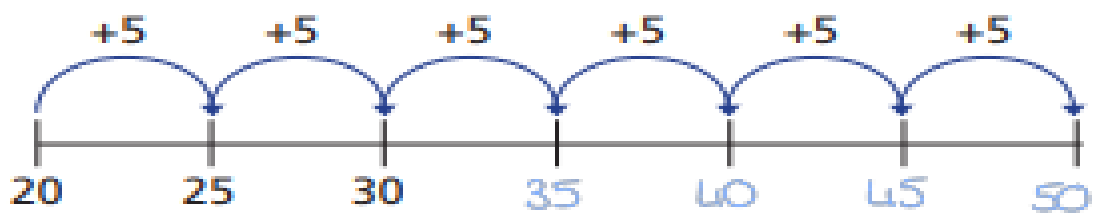
a)



b)



c)



5 Tom has these balloons.



He needs 60 balloons for a party.

Does Tom have enough balloons? Yes

How do you know?