



## HOME LEARNING

Subject: Maths

Time to complete: 1 hour

**Miss Kane will be running an online LIVE lesson on Teams on:  
Wednesday 10<sup>th</sup> February at 10:15am**

**[Click HERE to log into Teams](#)**

### Task 1 Miss Kane

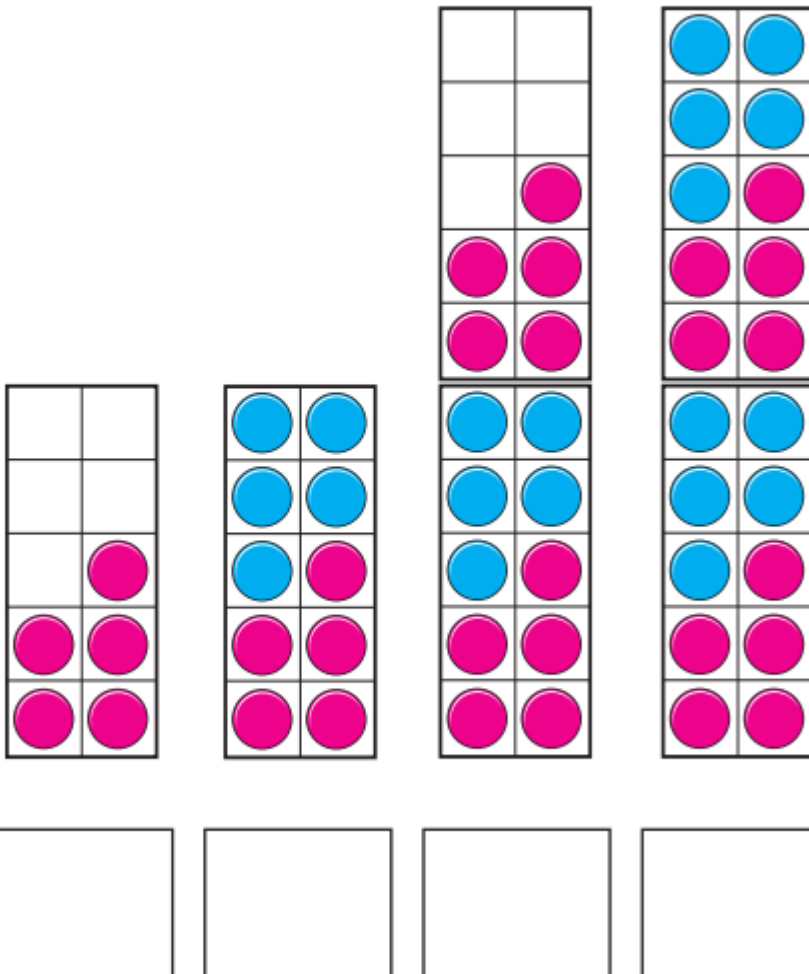
**Learning Objective: I can count in 5s**

Click on the link to watch the following video:

<https://vimeo.com/458895748>

Using what you have learnt from the video, complete the following:

**I** What are the numbers?




2 How many spots are there in total?



There are  spots in total.

3 Colour 35 petals.



4 Fill in the missing numbers.

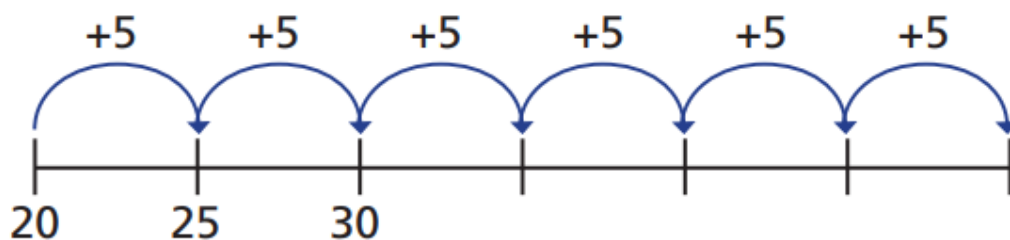
a)



b)



c)



- 5** Mo counts up to 50 in 5s.  
Eva counts up to 50 in 2s.  
What numbers do they both say?  
Can you spot a pattern?

**Save your work:**

**If you are using a computer, open a blank document to do your work (you can use Word or Publisher).  
Don't forget to SAVE it with your name, the lesson you are doing and the date.**

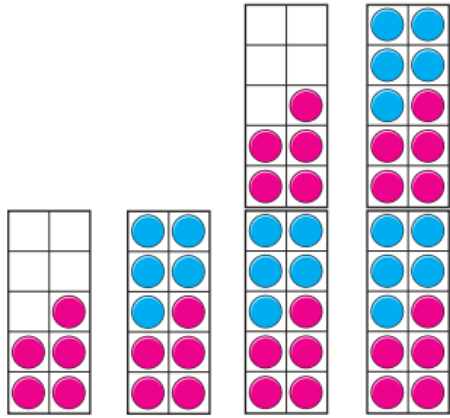
**For example: T.Smith Maths 8 April**

**If you would like us to see or mark your work please email it or send a photo of your completed work to the member of staff.**

[skane@glebe.bromley.sch.uk](mailto:skane@glebe.bromley.sch.uk)

**Thank you**

1 What are the numbers?




5 10 15 20

2 How many spots are there in total?



There are 25 spots in total.

3 Colour 35 petals.



4 Fill in the missing numbers.

